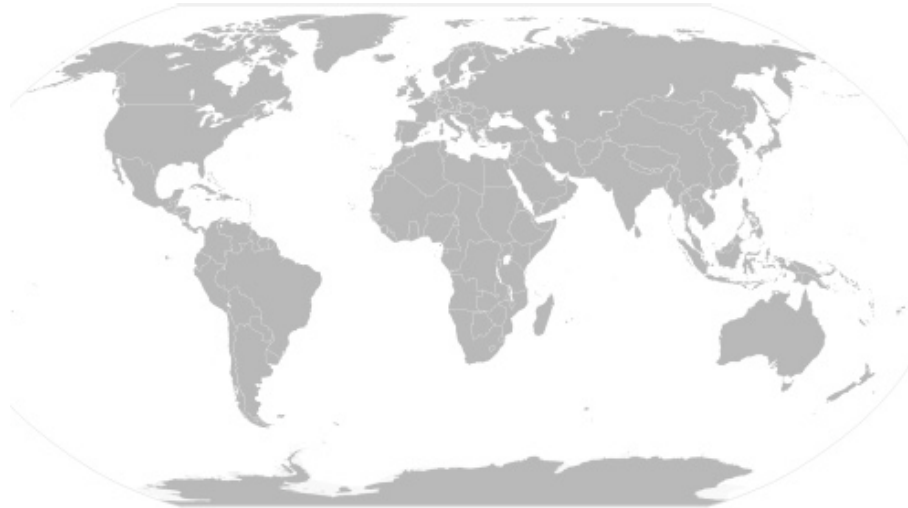


**The Study of Ecology & Biodiversity!**  
**Snow Leopard**  
*Uncia uncia*

Circle their geographic range on the map below:



Within their range, what **biome**, **habitat** and **niche** do snow leopards occupy? Which of their physical characteristics clue you in to this?

Circle the status of snow leopards in the wild. If their status is anything but Least Concern, what can be done to improve it?

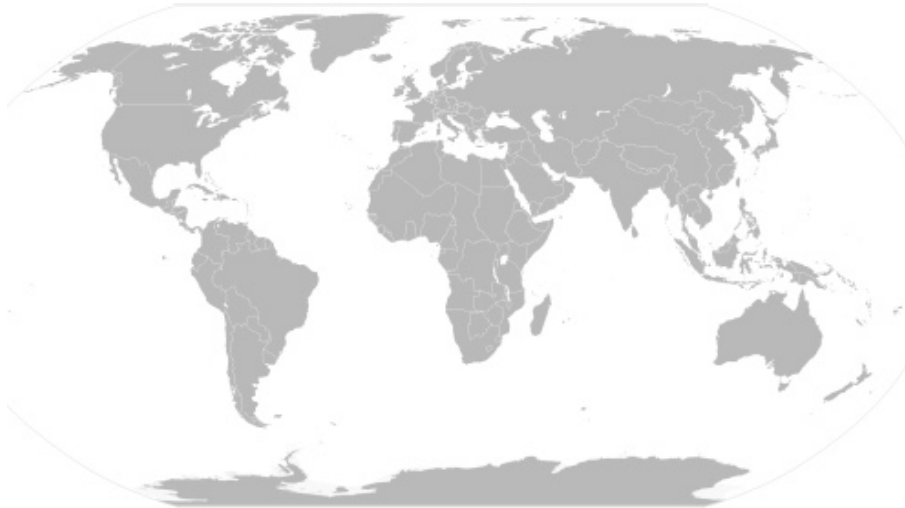
Least Concern      Near Threatened      Vulnerable      Endangered      Critically Endangered

Describe the main physical characteristics and adaptations of snow leopards.

Draw a simple food chain or web depicting life in the snow leopard's ecosystem, including other life forms that share its habitat.

**The Study of Ecology & Biodiversity!**  
**Grizzly Bear**  
*Ursus arctos*

Circle their geographic range on the map below:



Within their range, what **biome**, **habitat** and **niche** do grizzly bears occupy? Which of their physical characteristics clue you in to this?

Circle the status of grizzly bears in the wild. If their status is anything but Least Concern, what can be done to improve it?

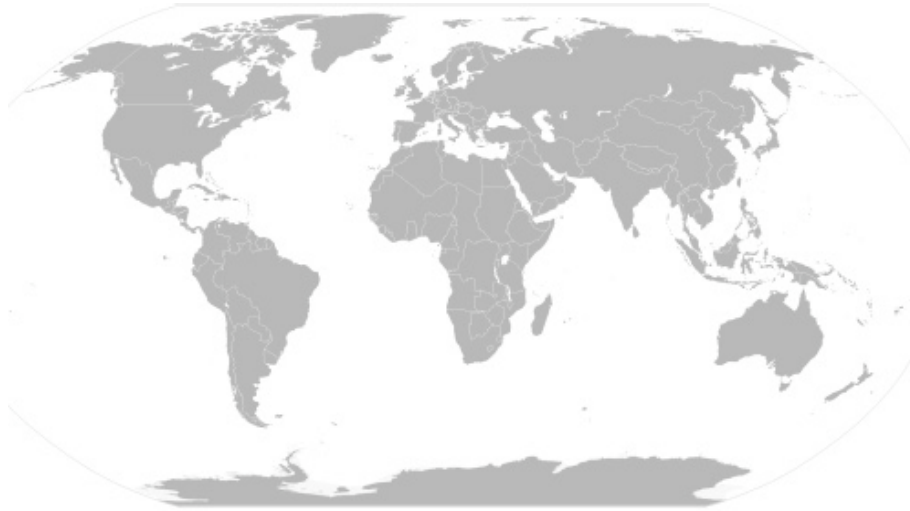
Least Concern      Near Threatened      Vulnerable      Endangered      Critically Endangered

Describe the main physical characteristics and adaptations of grizzly bears.

Draw a simple food chain or web depicting life in the grizzly bear's ecosystem, including other life forms that share its habitat.

**The Study of Ecology & Biodiversity!**  
**Red Ruffed Lemur**  
*Varecia variegata rubra*

Circle their geographic range on the map below:



Within their range, what **biome**, **habitat** and **niche** do red ruffed lemurs occupy? Which of their physical characteristics clue you in to this?

Circle the status of red ruffed lemurs in the wild. If their status is anything but Least Concern, what can be done to improve it?

Least Concern      Near Threatened      Vulnerable      Endangered      Critically Endangered

Describe the main physical characteristics and adaptations of red ruffed lemurs.

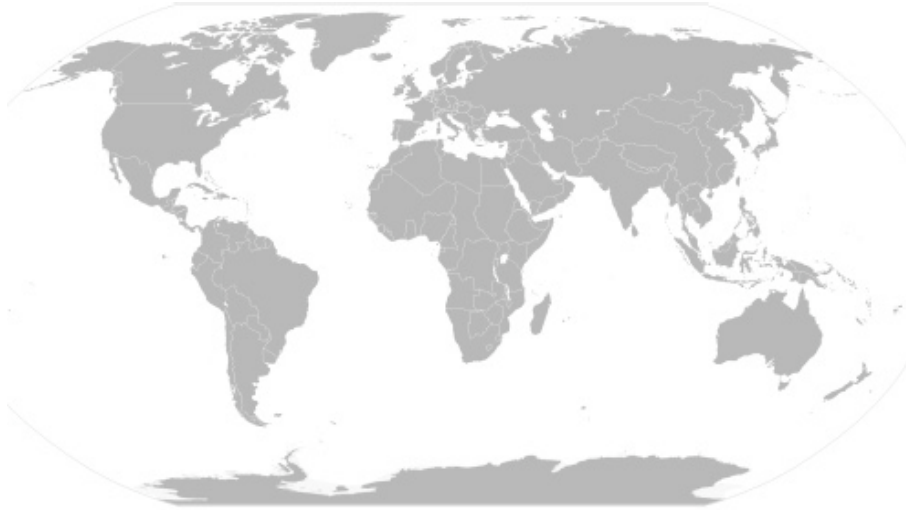
Draw a simple food chain or web depicting life in the red ruffed lemur's ecosystem, including other life forms that share its habitat.

## The Study of Ecology & Biodiversity!

### Bald Eagle

*Haliaeetus leucocephalus*

Circle their geographic range on the map below:



Within their range, what **biome**, **habitat** and **niche** do bald eagles occupy? Which of their physical characteristics clue you in to this?

Circle the status of bald eagles in the wild. If their status is anything but Least Concern, what can be done to improve it?

Least Concern      Near Threatened      Vulnerable      Endangered      Critically Endangered

Describe the main physical characteristics and adaptations of bald eagles.

Draw a simple food chain or web depicting life in the bald eagle's ecosystem, including other life forms that share its habitat.